

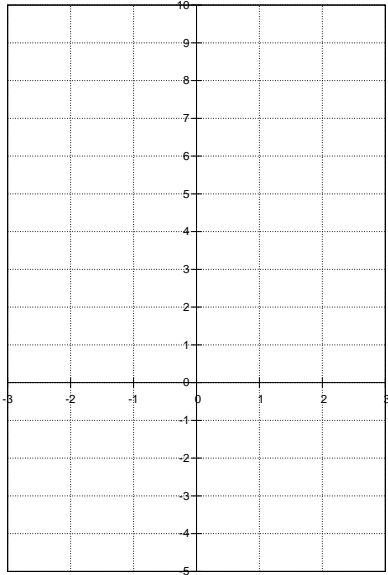
練習問題 16

学籍番号

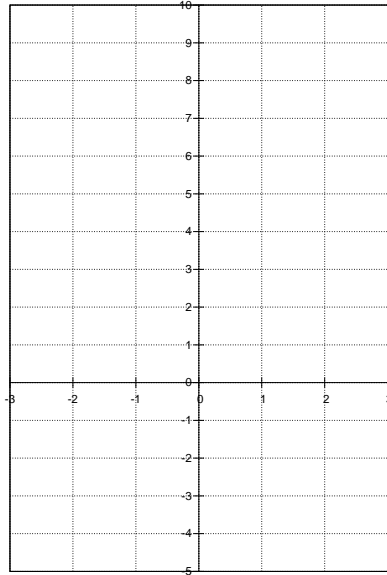
名前

問題 1 次の 2 次関数の頂点の座標を求め、グラフを描け。

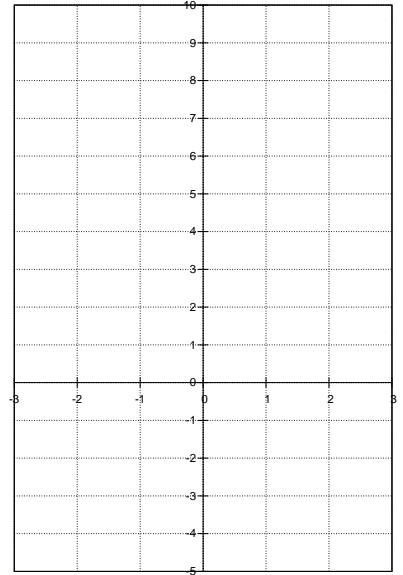
(1) $y = -x^2 + 4$



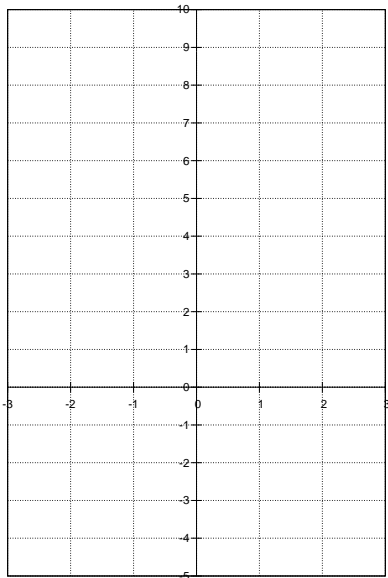
(2) $y = -x^2 + 2x$



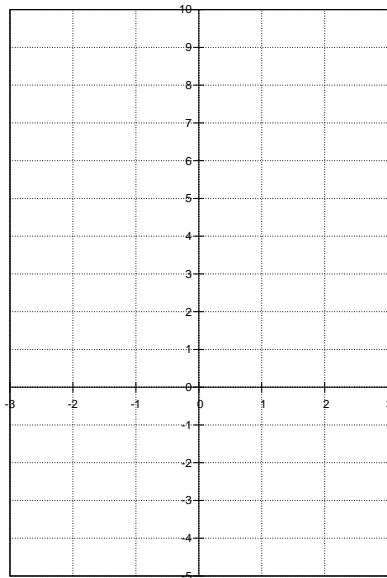
(3) $y = x^2 + 4x + 2$



(4) $y = 2x^2 + 4x + 2$



(5) $y = x^2 + x + 1$



(6) $y = -\frac{1}{2}x^2 - 2x$

