

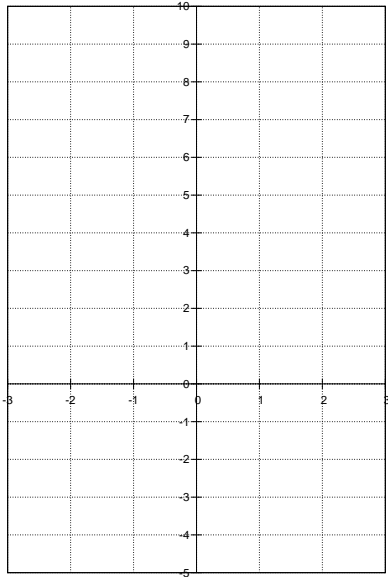
練習問題 15

学籍番号

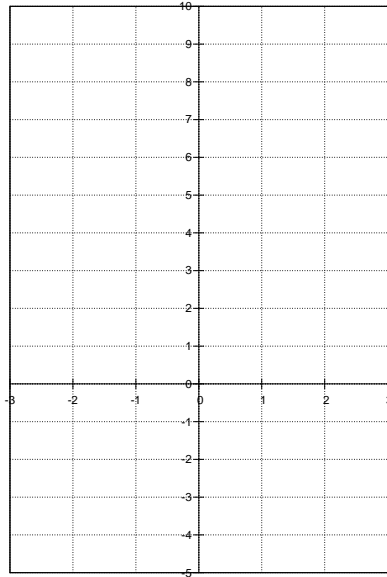
名前

問題 1 次の 2 次関数のグラフを描け。

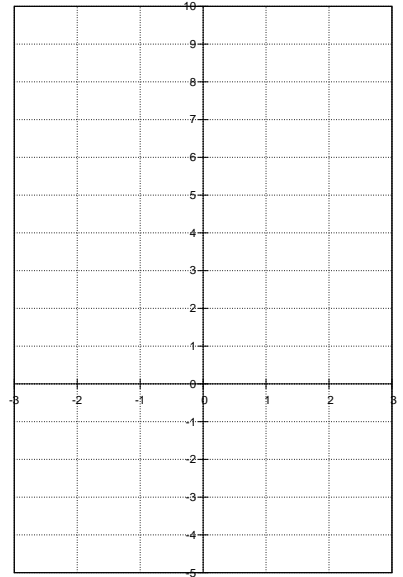
(1) $y = \frac{1}{2}x^2$



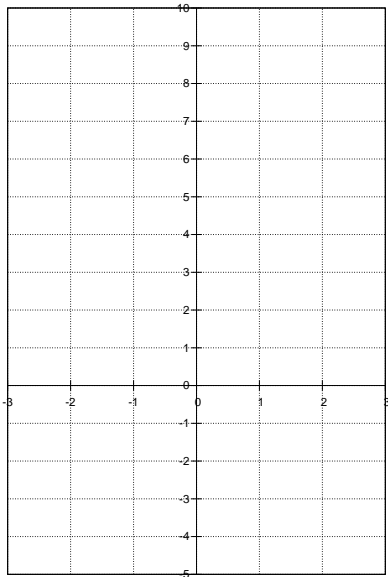
(2) $y = x^2 + 3$



(3) $y = (x + 1)^2$



(4) $y = (x - 1)^2$



(5) $y = (x + 1)^2 + 3$

