

練習問題 16Extra

vskip 5mm

学籍番号

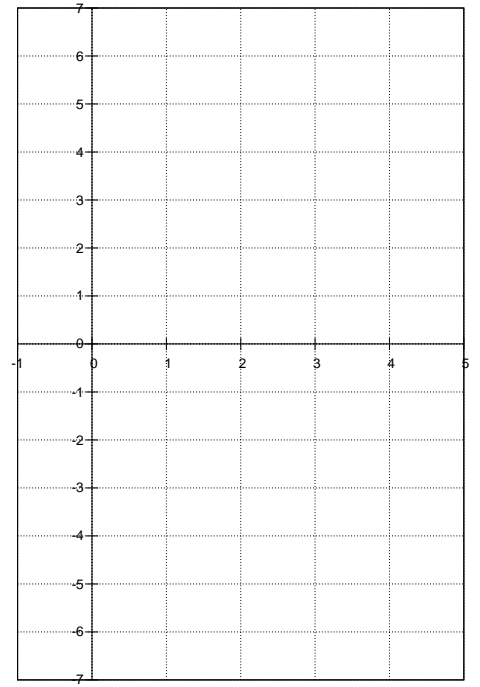
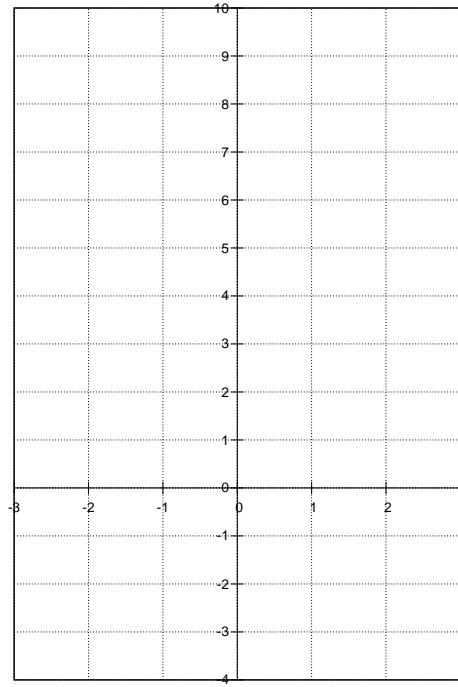
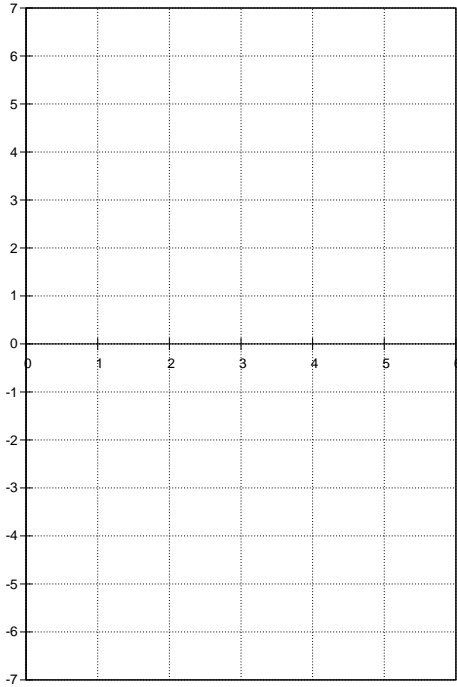
名前

問題 1 次の2次関数を平方完成して頂点の座標を求め、グラフを描け。

(1) $y = x^2 - 6x + 4$

(2) $y = 2x^2 + 4x + 3$

(3) $y = -2x^2 + 8x - 4$



(4) $y = -3x^2 - 6x - 5$

(5) $y = 2x^2 - 2x + 2$

(6) $y = -\frac{1}{2}x^2 - 3x$

