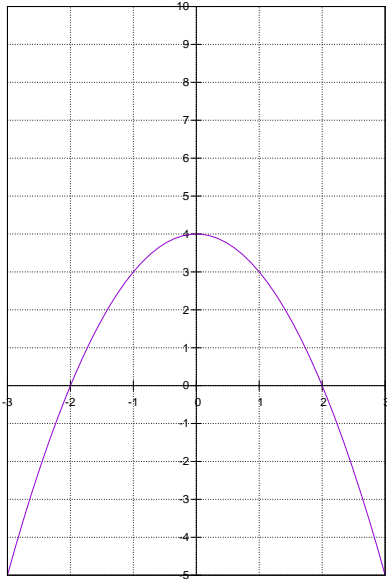


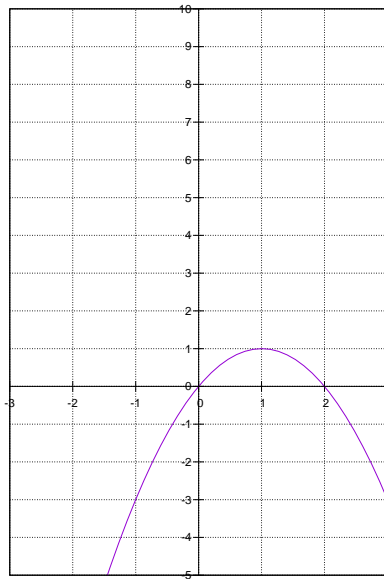
演習問題 16 解答

問題 1 次の 2 次関数の頂点の座標を求め、グラフを描け。

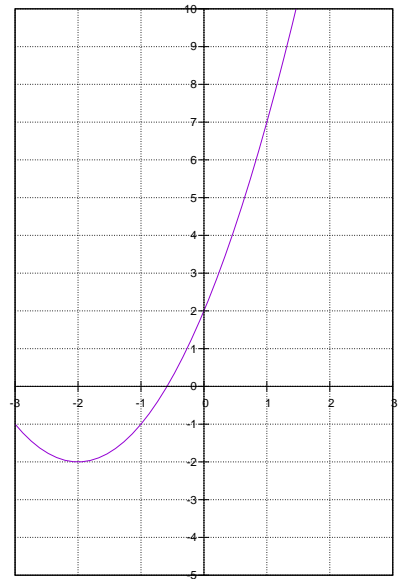
(1) 頂点の座標 $(0, 4)$



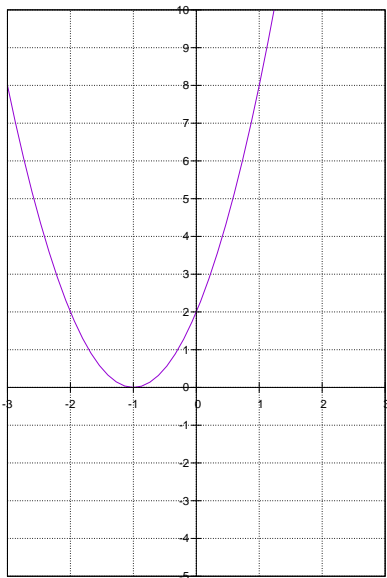
(2) 頂点の座標 $(1, 1)$



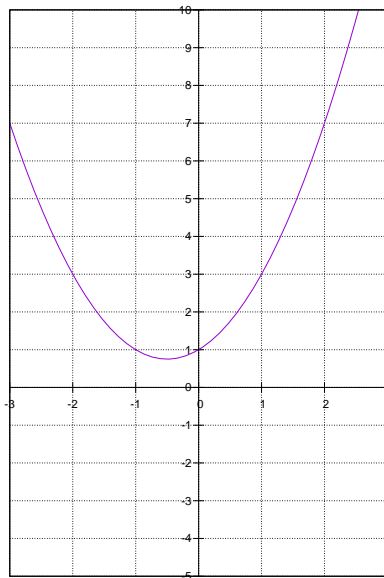
(3) 頂点の座標 $(-2, -2)$



(4) 頂点の座標 $(-1, 0)$



(5) 頂点の座標 $(-\frac{1}{2}, \frac{3}{4})$



(6) 頂点の座標 $(-2, 2)$

